



## Unit 1 ADDITION AND SUBTRACTION

### A. Tick (✓) the correct option.

- 74521 is \_\_\_\_\_ less than 75521.  
a. 1      b. 10      c. 100      d. 1000
- The number 100 less than 6149 is  
a. 5149.    b. 6049.    c. 6140.    d. none of these
- The difference of two numbers is 7. If one number is 8, the other number is  
a. 15.      b. 7.      c. 2.      d. 1.
- The sum of two numbers is 20. If one number is 16, the other number is  
a. 2.      b. 36.      c. 20.0      d. none of these

### B. Arrange in columns to solve.

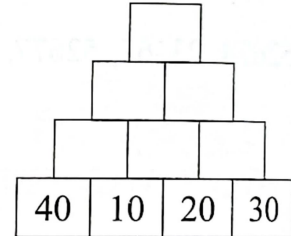
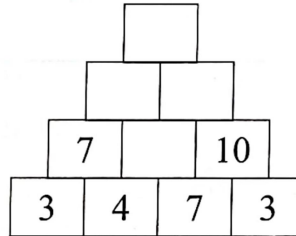
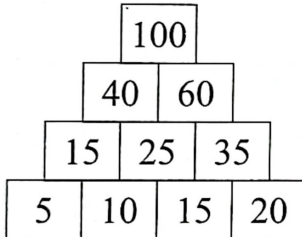
- $32683 + 4375 + 5764$
- $68502 - 35743$
- $2398 - 1899 + 1647$

### C. Solve these word problems.

- What should be added to 3891 to get 7938?
- Mohit bought an MP3 player for ₹ 20598. Safina bought the same MP3 player but paid ₹ 1999 more than Mohit. How much money did Safina pay?
- On Tuesday, 2658 students attended school. Out of these 1785 were girls. How many boys were there?

**D. Observe and Fill the pattern :**

**A. Look at this additon pyramid. Study the pattern and fill in the boxes.**



**B. Look at this subtraction pyramid. Study the pattern and fill in the boxes.**

